



The answer is 240

The answer to a calculation is 240.

What could the calculation be?

Sort the calculations into sets like this.



$$140 + 100$$

$$60 + 180$$


$$300 - 60$$

$$500 - 260$$

240



Could there be
more sets?



Try using three numbers
in your calculations.